



THIRD SPACE
LEARNING

Mathematics

Paper 2

(Calculator)

Foundation Tier

Edexcel GCSE

SET 5

Mathematics Paper 2 (Calculator) Foundation Tier Edexcel

GCSE SET 5

Name

Total marks

Paper length: 1hr 30mins



Instructions

- Use black ink or ball-point pen.
- Fill in the boxes at the top of this page with your name, centre number and candidate number.
- Answer all questions.
- Answer the questions in the spaces provided – there may be more space than you need.
- You must show all your working.
- Diagrams are NOT accurately drawn, unless otherwise indicated.
- Calculators may be used.

Information

- The total mark for this paper is 80
- The marks for each question are shown in brackets – use this as a guide as to how much time to spend on each question.

Advice

- Read each question carefully before you start to answer it.
- Keep an eye on the time.
- Try to answer every question.
- Check your answers if you have time at the end.

Question	Mark
1	
2	
3	
4	
5	
6	
7	
8	
9	
10	
11	
12	
13	
14	
15	
16	
17	
18	
19	
20	
21	
22	
23	
24	
25	
26	
27	
28	

You must have: Ruler graduated in centimetres and millimetres, protractor, pair of compasses, pen, HB pencil, eraser. Tracing paper may be used.

This practice paper is based on the topics from the **advanced information for the November 2026 exam series**.

Please note, this practice paper is an example to help revision, these topics can be tested in other ways and other topics may be included in the actual papers

- 1 Write the following numbers in order of size.
Start with the smallest number.

-7 -1 0.7 7 -17

(Total for Question 1 is 1 mark)

- 2 Write 77% as a fraction.

(Total for Question 2 is 1 mark)

- 3 Round 38729 to the nearest 100

(Total for Question 3 is 1 mark)

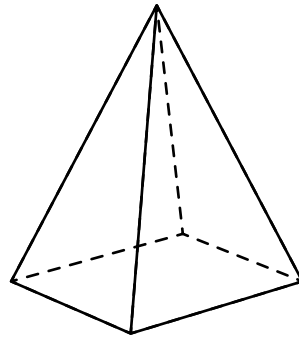
- 4 (a) Simplify $b + b + b + b$

(1)

- (b) Simplify $3a + a + 7a - 2a$

(1)
(Total for Question 4 is 2 marks)

- 5 Here is a 3D shape.



Write down the mathematical name of this shape.

(Total for Question 5 is 1 mark)

- 6 Lorraine writes down the number of miles her car has travelled before and after a journey.

Before	69543
After	69871

Lorraine can claim 45p per mile from her employer to cover her travel expenses.

How much can Lorraine claim for this journey?

Give your answer in pounds.

£

(Total for Question 6 is 4 marks)

7 Hannah is going to do some campfire cooking.
Here are the options of what Hannah could cook:

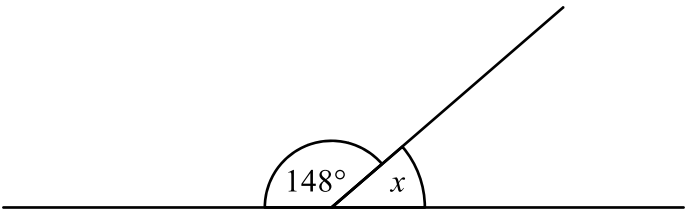
Food	Drink
Campfire stew (S)	Hot chocolate (C)
Jacket potatoes (P)	Tea (T)
Cinnamon Buns (B)	Warm apple juice (A)

Hannah is going to choose one food and one drink.

Write down the possible combinations Hannah could choose.

(Total for Question 7 is 2 marks)

8 Work out the size of angle x



(Total for Question 8 is 1 mark)

9 Here is part of a bus timetable between Saron and Carmarthen

Saron	0711		0811		0911
Cwmdud	0722		0823		0923
Cynwel Elfed	0729	0800	0831	0900	0931
Bronwydd	0736	0807	0839	0908	0939
Abergwili	0744	0815	0848	0917	0948
Carmarthen	0750	0821	0855	0924	0955

(a) How long should the 0711 bus from Saron take to get to Abergwili?

minutes

(1)

(b) Sheila catches the bus from Saron to Carmarthen.

It takes Sheila 8 minutes to walk from her house to the bus stop in Saron.

It takes Sheila 11 minutes to walk from the bus stop in Carmarthen to her office.

Sheila needs to get to work in Carmarthen by 0915

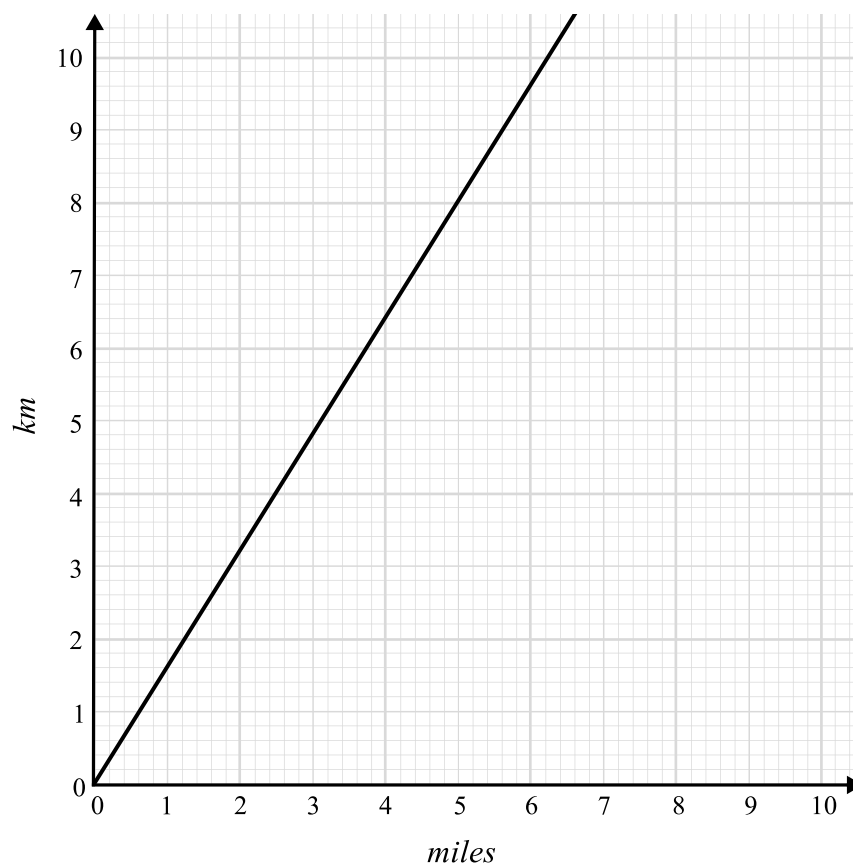
Write out a plan for Sheila's journey.

State the latest time that Sheila can leave the house and the time she will get to work.

(3)

(Total for Question 9 is 4 marks)

10 This graph can be used to convert miles into km.



(a) Use the graph to convert 3 miles into km.

(1)

(b) The speed limit on a road is 90km/h.

Gary drives along the road at 58 miles per hour.

Does Gary break the speed limit?

Show how you decide.

(3)

(Total for Question 11 is 4 marks)

11 Write the following fractions in order of size.

Start with the smallest.

$$\frac{3}{4}$$

$$\frac{7}{10}$$

$$\frac{3}{5}$$

$$\frac{33}{40}$$

(Total for Question 11 is 2 marks)

12 (a) Work out $\frac{\sqrt{52 - 4.3^2}}{2.2}$

Write down all the figures on your calculator display.

(2)

(b) Round your answer to 2 decimal places.

(1)

(Total for Question 12 is 3 marks)

- 13** 150 people chose their favourite pizza toppings from margherita, pepperoni and Hawaiian.

Of the 150 people, 82 were children.

62 people chose margherita.

42 children chose margherita.

18 children chose Hawaiian.

Twice as many adults as children chose Hawaiian.

Work out the number of children who chose pepperoni.

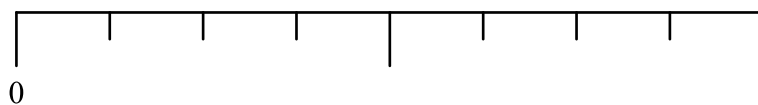
(Total for Question 13 is 4 marks)

- 14** A factory produces 3000 tubes of toothpaste per day.
A box contains 24 tubes of toothpaste.
A crate contains 16 boxes.

How many full crates of toothpaste are produced in 5 days?

(Total for Question 14 is 4 marks)

- 15** Niamh has a bag containing 3 blue counters, 7 green counters and 6 yellow counters.
Draw an arrow (\downarrow) on the probability scale to show the probability that Niamh picks a yellow counter from the bag.



(Total for Question 15 is 2 marks)

16 The table shows information about the number of children in 50 primary schools.

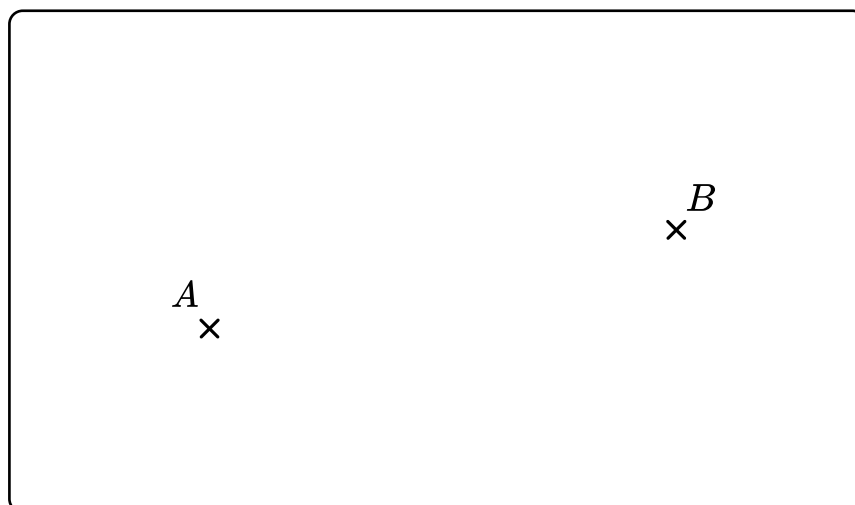
Number of children	Frequency
$0 < c \leq 100$	6
$100 < c \leq 200$	16
$200 < c \leq 300$	11
$300 < c \leq 400$	10
$400 < c \leq 500$	7

Work out an estimate for the mean number of children in the schools.

(Total for Question 16 is 3 marks)

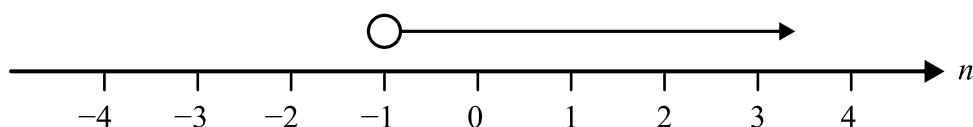
17 Here are two points, A and B .

Construct the locus of points that are equal distance from points A and B .



(Total for Question 17 is 2 marks)

18 (a)



Write down the inequality shown on the number line.

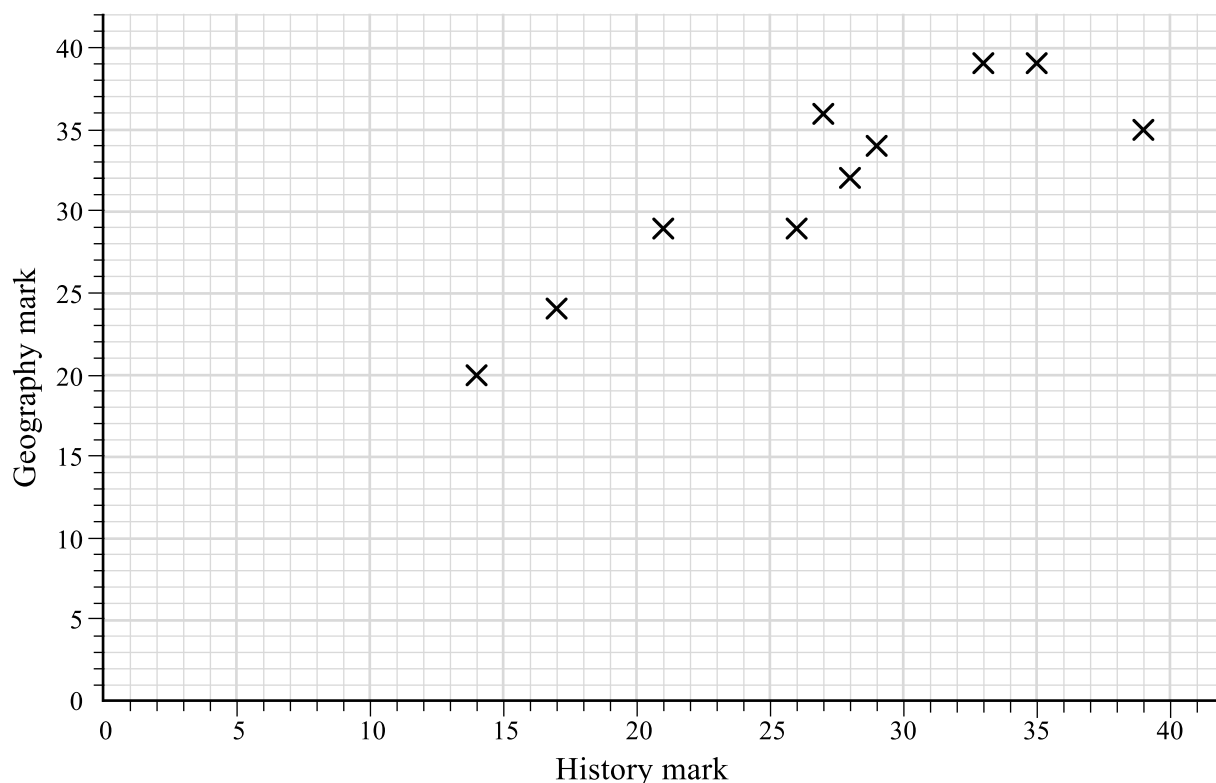
(1)

(b) Solve $3p - 11 < p + 5$

(2)

(Total for Question 18 is 3 marks)

19 The scatter diagram shows the history and geography marks of 10 students in their recent tests.



(a) Describe the relationship between students' marks in the history test and the geography test.

(1)

(b) Another student scored 25 in the history test.

Use the graph to estimate this student's score in the geography test.

(2)

(c) Both tests were out of 40. Which test do you think was easier? Explain why.

(2)

(Total for Question 19 is 5 marks)

20 (a) The first 5 terms of an arithmetic sequence are

6 11 16 21 26...

Find an expression in terms of n for the n th term of this sequence.

(2)

(b) The n th term of a different sequence is $n^2 + 3$

172 is a term in this sequence.

Find the next term after 172.

(3)

(Total for Question 20 is 5 marks)

21 (a) The ratio of adults:children watching a film at the cinema is 3:5.

There are 27 adults watching the film.

How many children are watching the film?

(2)

(b) $\frac{3}{5}$ of the children have popcorn.

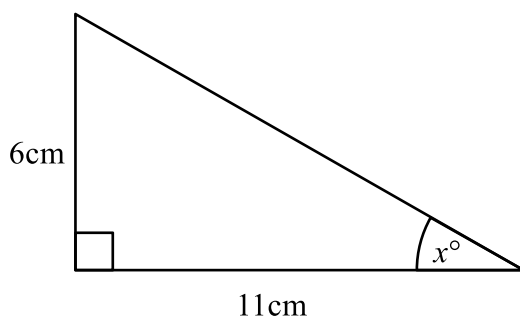
$\frac{2}{3}$ of the adults have popcorn.

What percentage of the people watching the film have popcorn?

(3)

(Total for Question 21 is 5 marks)

22



Work out the value of x

Give your answer correct to 3 significant figures

(Total for Question 22 is 2 marks)

23 Frankie invests £7000 in a bank account

Frankie gets 6% per annum compound interest

After n years, Frankie has £9367.58

Work out the value of n

(Total for Question 23 is 2 marks)

- 24** A helicopter travels 50km north and then 70km east.
The helicopter then travels directly back to its starting point.
The cost of fuel for the helicopter is £2.50 per km .
What is the cost of the fuel for the helicopter's journey?

£
-----**(Total for Question 24 is 4 marks)**

- 25** Solve

$$3a + 2b = 11$$

$$4a - 5b = 30$$

 $a =$
----- $b =$
-----**(Total for Question 25 is 3 marks)**

26 (a) Find the reciprocal of 0.4

(1)

(b) $x = 5.3$ to 2 significant figures

Complete the error interval for x

 $\leq x <$

(2)

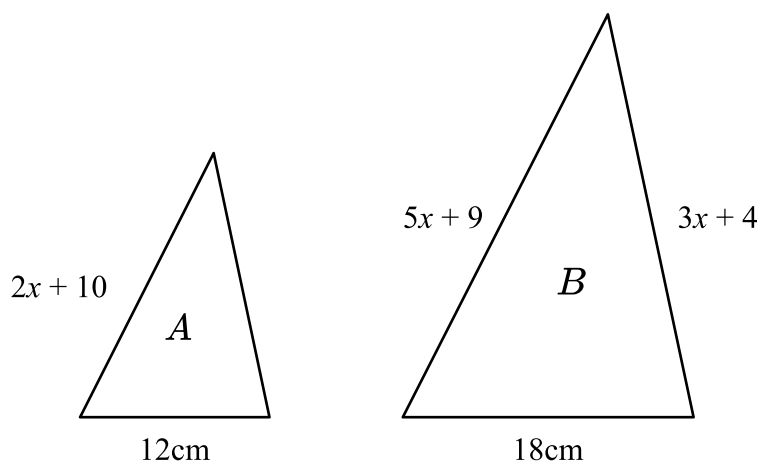
(Total for Question 26 is 3 marks)

27 The bearing of A from B is 121° .

What is the bearing of B from A ?

(Total for Question 27 is 2 marks)

28 Triangles A and B are similar triangles.



Work out the perimeter of triangle B .

 cm


(Total for Question 28 is 5 marks)

Looking to improve your school's maths results without stretching your budget?

Tutoring from our spoken AI maths tutor Skye gives schools an even more affordable option for every pupil.

- ✓ 90% cheaper than other tutoring providers
- ✓ Curriculum-aligned lessons designed by qualified teachers
- ✓ Discounts available for long-term bookings and MATs

 thirdspacelearning.com

 0203 771 0095

 hello@thirdspacelearning.com

Where to go next?

For more GCSE maths revision resources and worksheets, visit the Third Space Learning [GCSE maths revision](#) pages. Or scan the QR code to discover our library of FREE GCSE maths revision resources:

